

## Welcome to AP Human Geography!!

Prior to the start of the 2019-2020 AP Human Geography course, students are required to choose one book from the attached list to read over the summer. These books relate to themes that will be covered in class. Find these books in amazon.com and read the summary. This will help you determine your selection.

Students are also required to complete the following packet of maps. You will be quizzed on these maps throughout the year.

A key advantage for you in this course will be your ability to broaden your “worldview.” We will utilize articles from the following magazines over the course of the year... *The Economist*, *Newsweek*, *Time*, and news websites like BBC and CNN. I recommend you take a moment each week to familiarize yourself with events that shape our world. There will be many discussions in class based on putting the principles that we learn into practice. The broader and deeper your worldview, the more you bring to these discussions.

When we come back in September, you will be required to analyze your book **in class** based on the guidelines stated below. Please familiarize yourself with the instructions below. If you have any questions, please email me at [charles.amanda@cranfordschools.org](mailto:charles.amanda@cranfordschools.org), or Mr. Mangarelli at [mangarelli@cranfordschools.org](mailto:mangarelli@cranfordschools.org) We look forward to seeing you in the Fall!

Sincerely,

Mrs. Charles and Mr. Mangarelli

### Instructions:

#### I. Origin

A. Author's name, place of publication, date of publication, number of pages in book.

#### II. Analysis (find the purpose and value of the author's viewpoint(s))

A. Author's objectives. What was the author's intent (purpose)?

B. Why is the author's message important to understanding the global society we live in? (Who benefits? How?)

#### III. Appraisal

A. Did you like/dislike the book and why? Provide evidence to support your claims. Please be as specific as possible.

**Human Geography Reading List (you must choose ONE book from the list below)**

**1. Food Inc.: A Participant Guide: How Industrial Food is Making Us Sicker, Fatter, and**

**Poorer-And What You Can Do About It** – edited by Karl Weber

**2. And the Mountains Echoed**-Khaled Hosseini

**3. How Soccer Explains the World: An Unlikely Theory of Globalization** - Franklin Foer

**4. Reading Lolita in Tehran:** Azar Nafisi

**5. We Just Want to Live Here: An Unlikely Teenage Friendship in the Two Jersusalems** -

Amal Rifa'I and Odelia Ainbinder

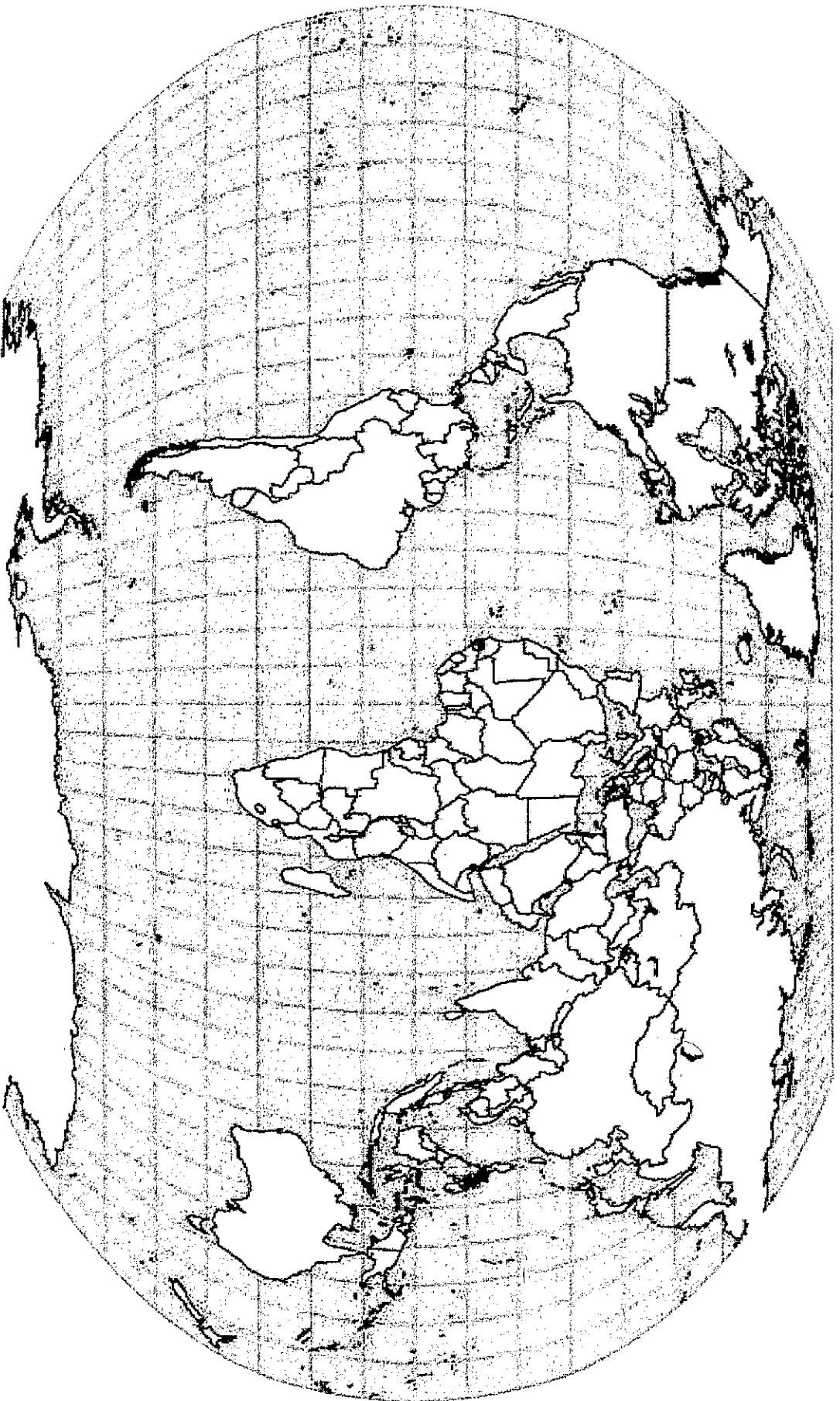
**6. Stones into Schools: Promoting Peace with Books, not Bombs in Afghanistan and**

**Pakistan** – Greg Mortenson

**7. Half the Sky: Turning Oppression into Opportunity for Women Worldwide** - Nicholas D.

Kristof and Sheryl WuDunn

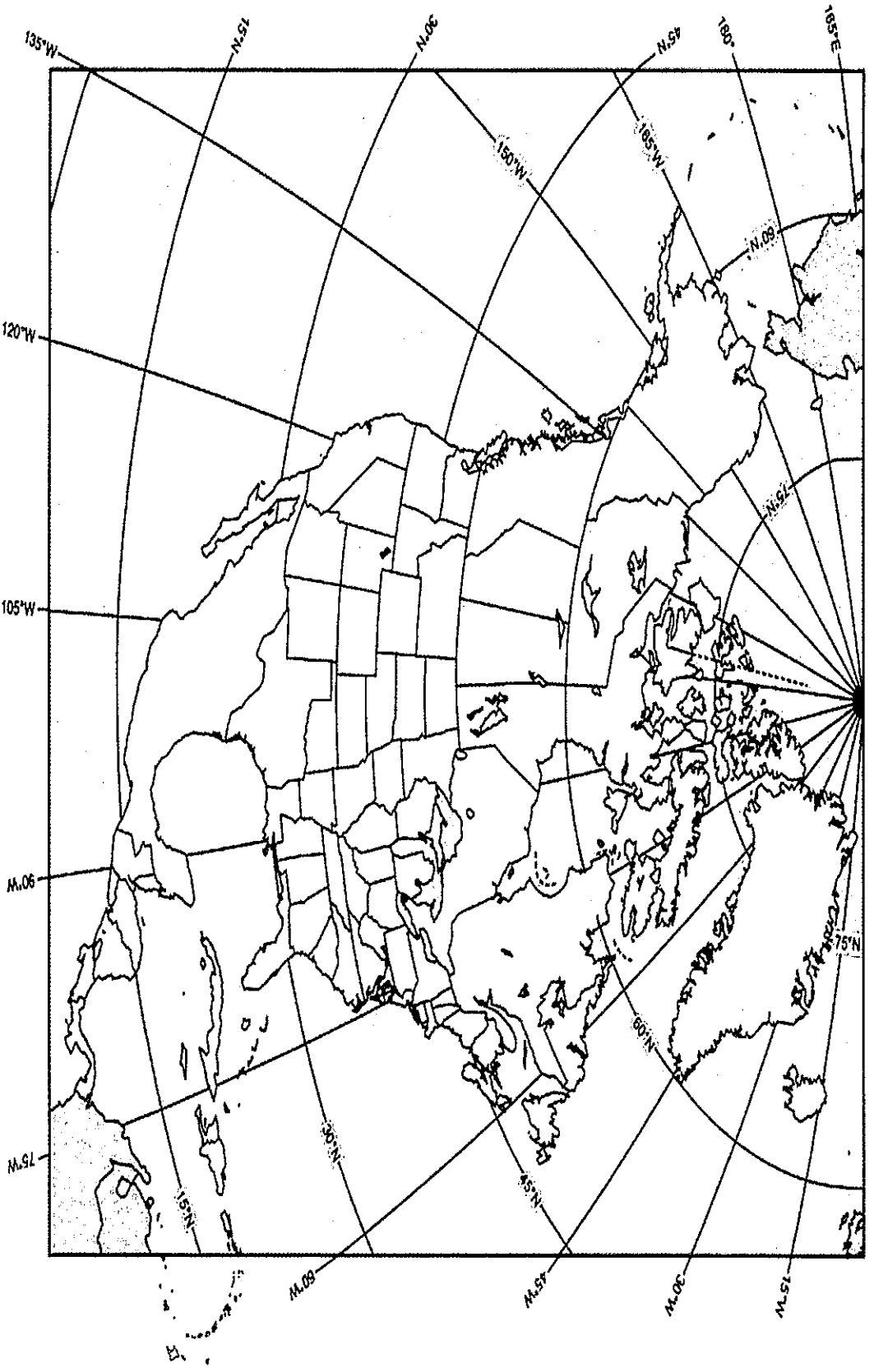
World Regions (Big Picture)



This map will be colored based on region not state (country). Each REGION must be a single color. Draw a circle around Central America, Sub-Saharan Africa, and the Russian Federation. Use the sample map provided to help you.

- 1. North America
- 2. Asia
- 3. Africa
- 4. Europe
- 5. Central America
- 6. Oceania
- 7. Sub-Saharan Africa
- 8. Russian Federation
- 9. South America
- 10. Antarctica

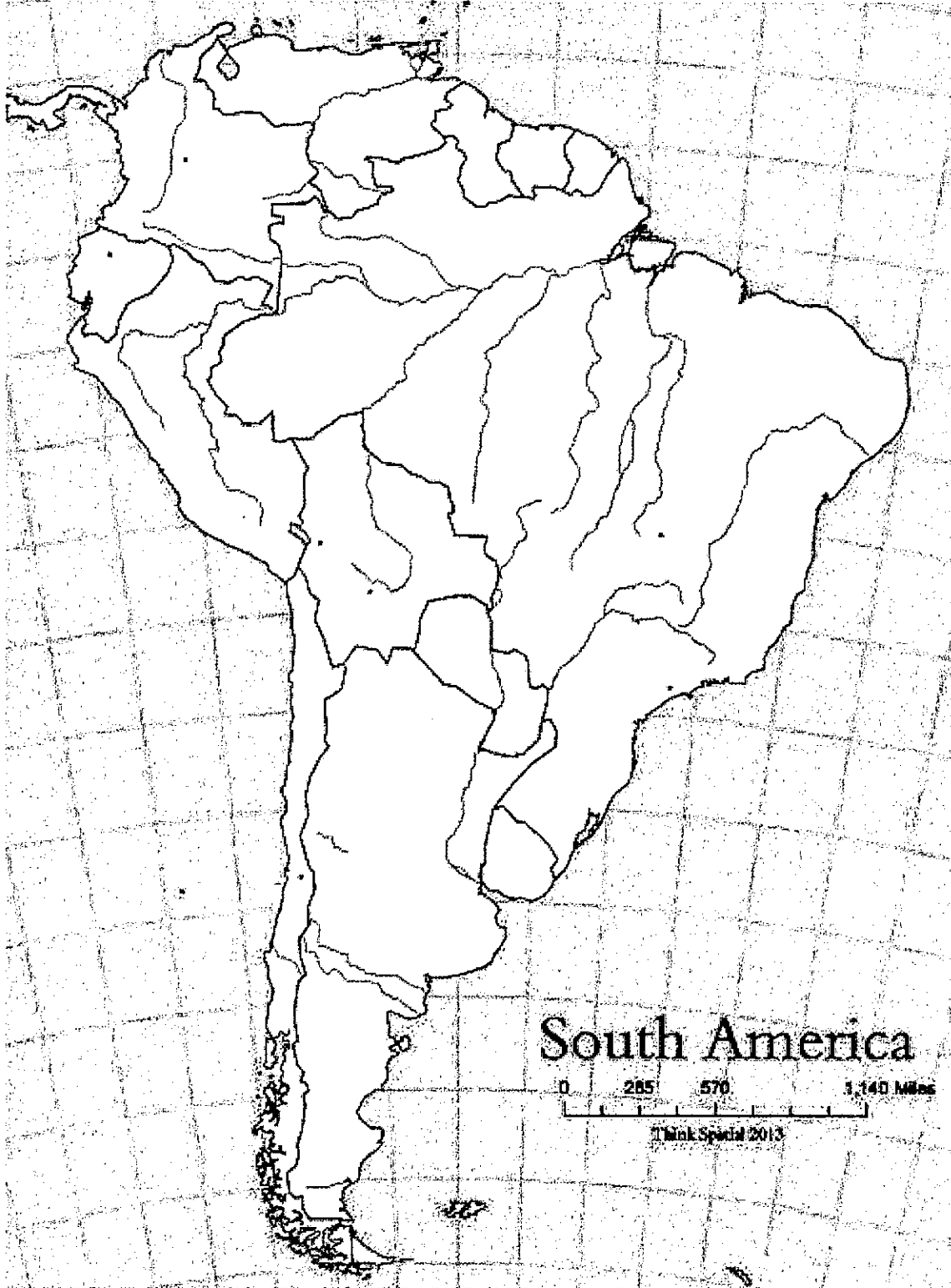
# North America and the Caribbean



Label the following:

- |                        |                 |                        |                 |                   |
|------------------------|-----------------|------------------------|-----------------|-------------------|
| 1. Bahamas             | 6. Cuba         | 11. Dominican Republic | 16. Haiti       | 21. Jamaica       |
| 2. Trinidad and Tobago | 7. Belize       | 12. Costa Rica         | 17. El Salvador | 22. Guatemala     |
| 3. Honduras            | 8. Mexico       | 13. Nicaragua          | 18. Panama      | 23. Canada        |
| 4. United States       | 9. Greenland    | 14. Chicago            | 19. Havana      | 24. Los Angeles   |
| 5. Managua             | 10. Mexico City | 15. New York City      | 20. Ottawa      | 25. Washington DC |

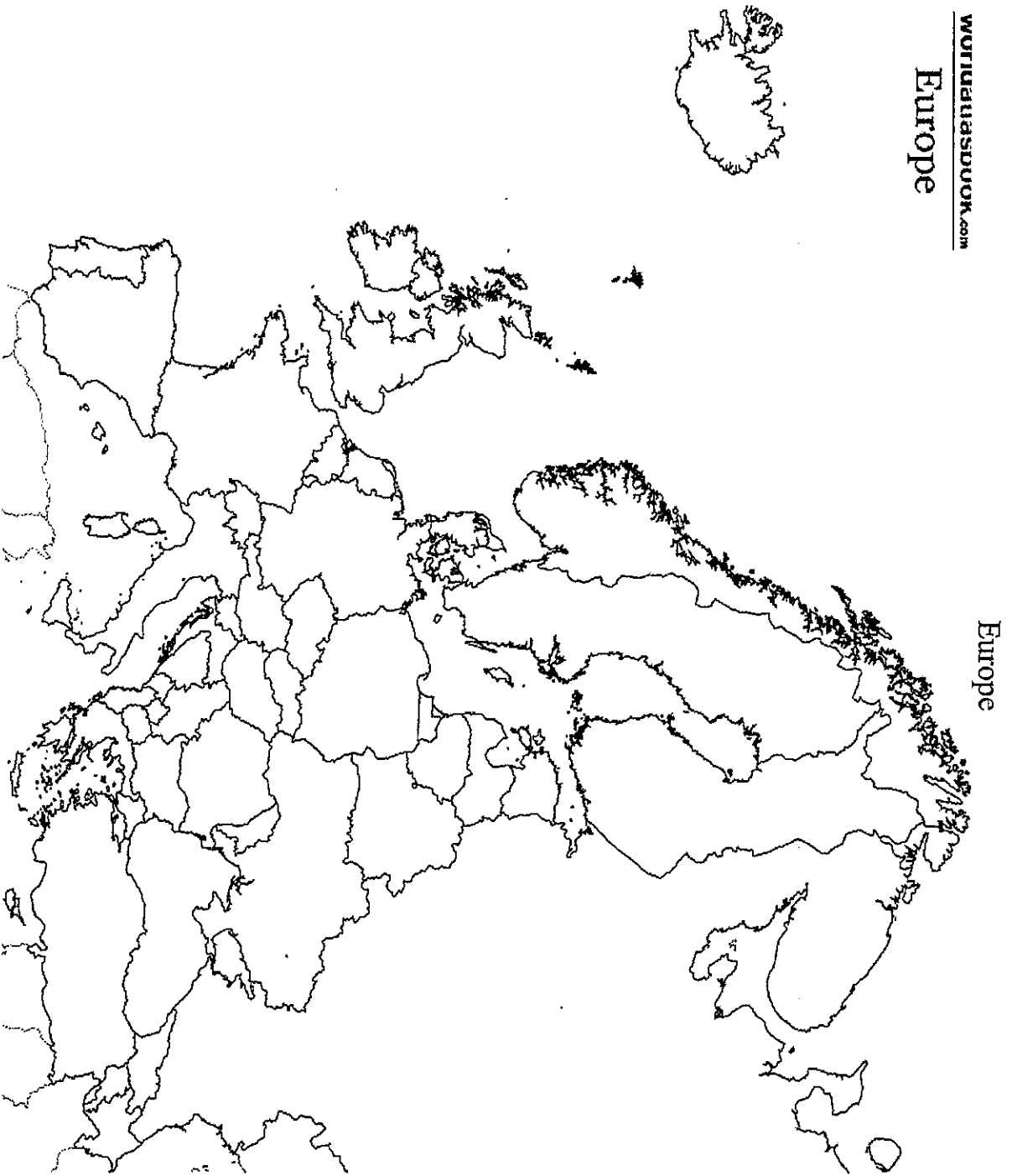
## South America



Label the following:

- |              |                   |               |                      |              |
|--------------|-------------------|---------------|----------------------|--------------|
| 1. Argentina | 6. Colombia       | 11. Uruguay   | 16. French Guiana    | 21. Lima     |
| 2. Ecuador   | 7. Paraguay       | 12. Chile     | 17. Buenos Aires     | 22. Brasília |
| 3. Peru      | 8. Venezuela      | 13. São Paulo | 18. Bolivia          |              |
| 4. Caracas   | 9. Rio de Janeiro | 14. Suriname  | 19. Falkland Islands |              |
| 5. Santiago  | 10. Guyana        | 15. Brazil    | 20. Bogotá           |              |

# Europe



Europe

Label the following:

1. *The Hague*
2. *Rome*
3. *Moscow*
4. *London*
5. *St. Petersburg*
6. *Brussels*
7. *Paris*
8. *Madrid*
9. *Berlin*
10. *Switzerland*
11. *Netherlands*
12. *Monaco*
13. *Luxembourg*
14. *Liechtenstein*
15. *Germany*
16. *France*
17. *Belgium*
18. *Austria*
19. *Spain*
20. *Slovenia*
21. *Serbia*
22. *San Marino*
23. *Portugal*
24. *Montenegro*
25. *Malta*
26. *Macedonia*
27. *Italy*
28. *Holy See (Vatican City)*
29. *Greece*
30. *Croatia*
31. *Bosnia and Herzegovina*
32. *Andorra*
33. *Albania*
34. *Belarus*
35. *Poland*

36. **Denmark**

37. **Latvia**

38. **Bulgaria**

39. **Romania**

40. **Estonia**

41. **Lithuania**

42. **Czech Republic**

43. **Russia**

44. **Finland**

45. **Norway**

46. **Hungary**

47. **Slovakia**

48. **Iceland**

49. **Sweden**

50. **Moldova**

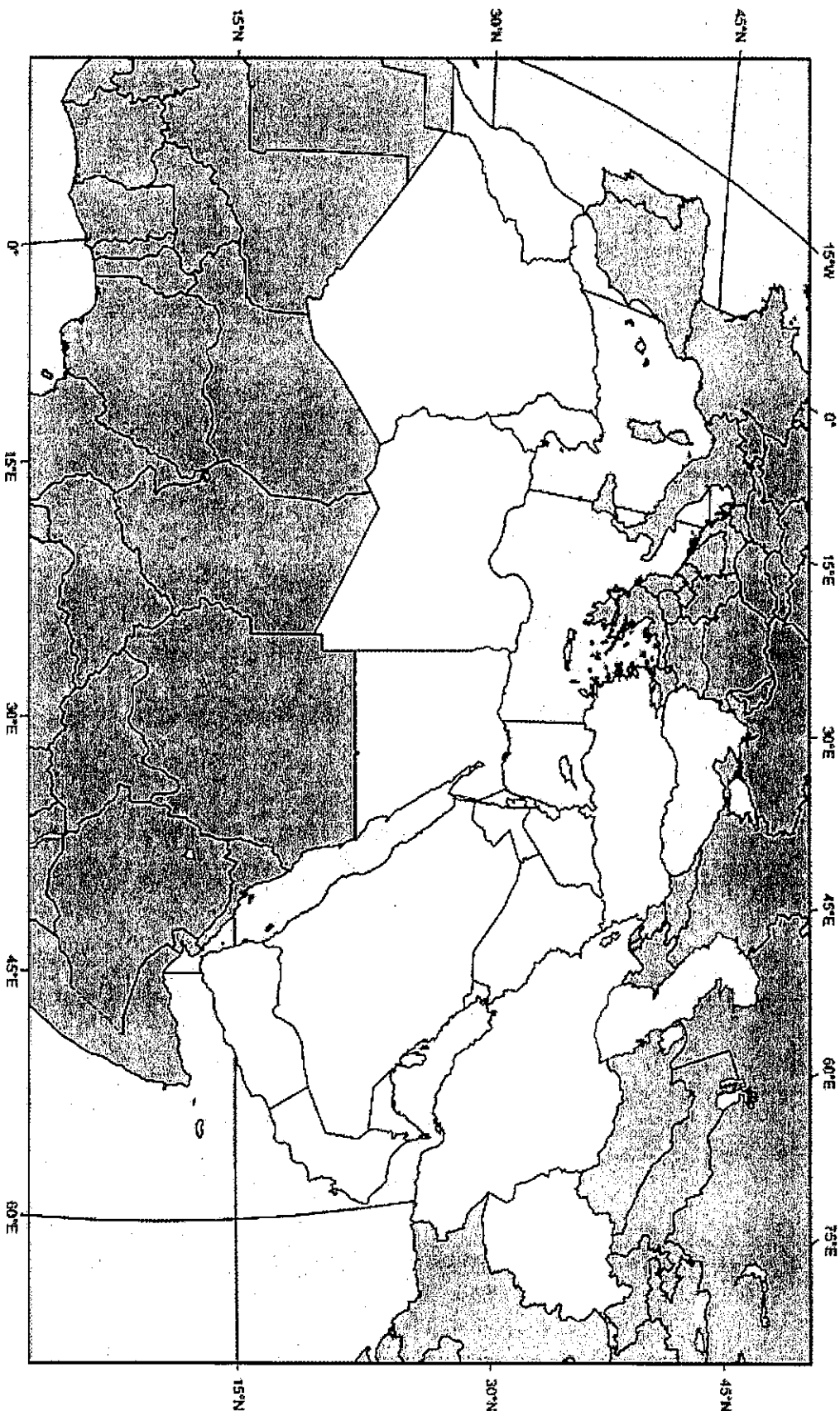
51. **Ukraine**

52. **Ireland**

53. **United Kingdom**

54. **Kosovo**

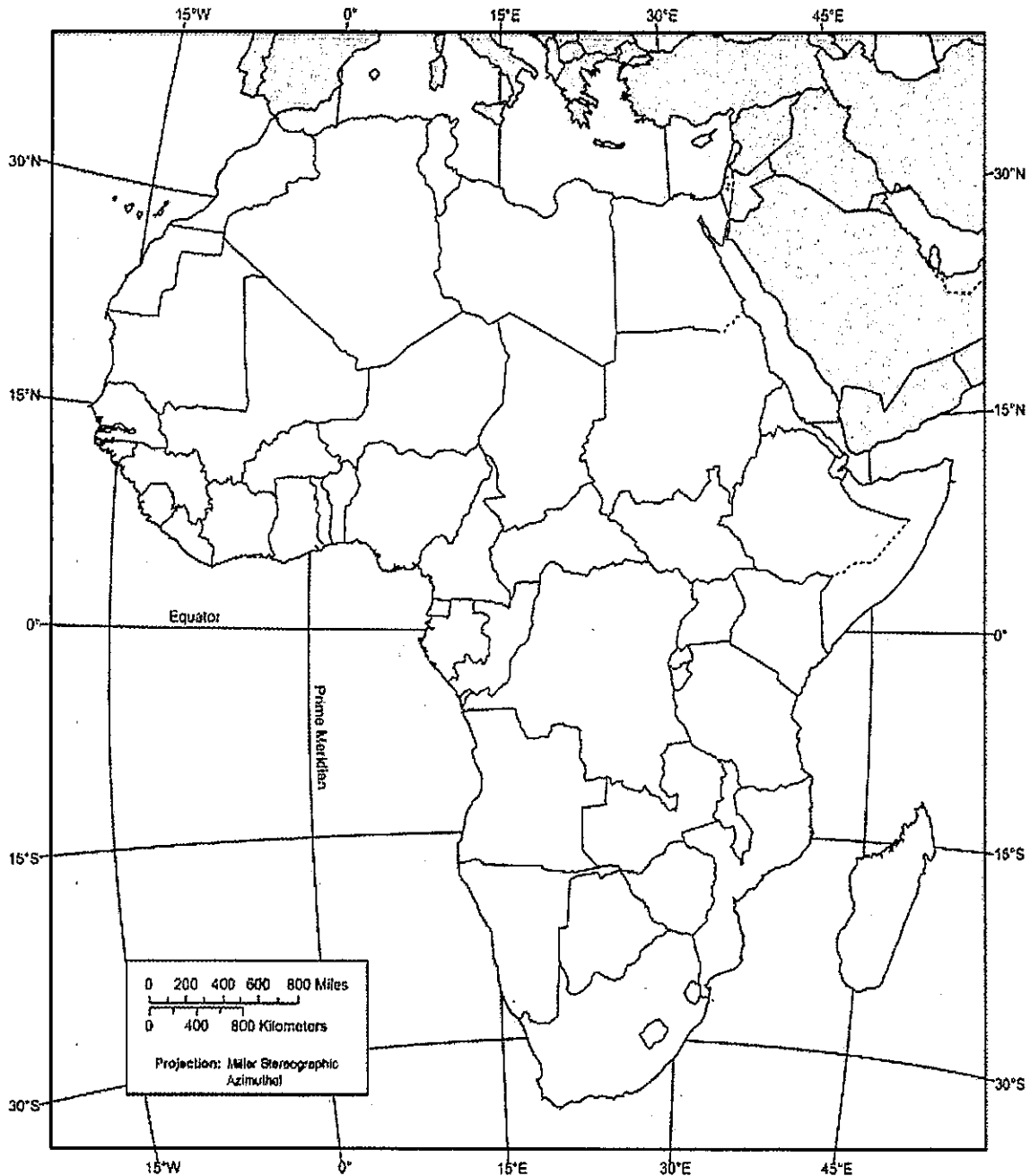
## North Africa and the Middle East



Label the following:

- |            |             |                          |               |                  |
|------------|-------------|--------------------------|---------------|------------------|
| 1. Algeria | 8. Egypt    | 15. Libya                | 22. Morocco   | 29. Sudan        |
| 2. Tunisia | 9. Armenia  | 16. Azerbaijan           | 23. Jerusalem | 30. Cyprus       |
| 3. Georgia | 10. Iraq    | 17. Israel               | 24. Jordan    | 31. Kuwait       |
| 4. Lebanon | 11. Oman    | 18. Palestine            | 25. Qatar     | 32. Saudi Arabia |
| 5. Syria   | 12. Turkey  | 19. United Arab Emirates | 26. Yemen     | 33. Baghdad      |
| 6. Beirut  | 13. Cairo   | 20. Damascus             | 27. Istanbul  | 34. Iran         |
| 7. Tehran  | 14. Tripoli | 21. Mecca                | 28. Medina    | 35. Afghanistan  |

## Sub-Saharan Africa



**Label the following:**

- |                 |                  |                   |                     |           |
|-----------------|------------------|-------------------|---------------------|-----------|
| 1. Burundi      | 12. Djibouti     | 23. Eritrea       | 34. Ethiopia        | 45. Niger |
| 2. Madagascar   | 13. Botswana     | 24. Chad          | 35. Rwanda          |           |
| 3. Somalia      | 14. South Sudan  | 25. Uganda        | 36. Tanzania        |           |
| 4. Zimbabwe     | 15. Angola       | 26. Cameroon      | 37. Central African |           |
| 5. Congo        | 16. Togo         | 27. Zambia        | 38. Ghana           |           |
| 6. Lesotho      | 17. Namibia      | 28. South Africa  | 39. Swaziland       |           |
| 7. Burkina Faso | 18. Cape Verde   | 29. Côte d'Ivoire | 40. Gambia          |           |
| 8. Benin        | 19. Liberia      | 30. Mali          | 41. Mauritania      |           |
| 9. Nigeria      | 20. Senegal      | 31. Sierra Leone  | 42. Democratic      |           |
| 10. Addis Ababa | 21. Cape Town    | 32. Lagos         | 43. Nairobi         |           |
| 11. Mogadishu   | 22. Johannesburg | 33. Accra         | 44. Kenya           |           |

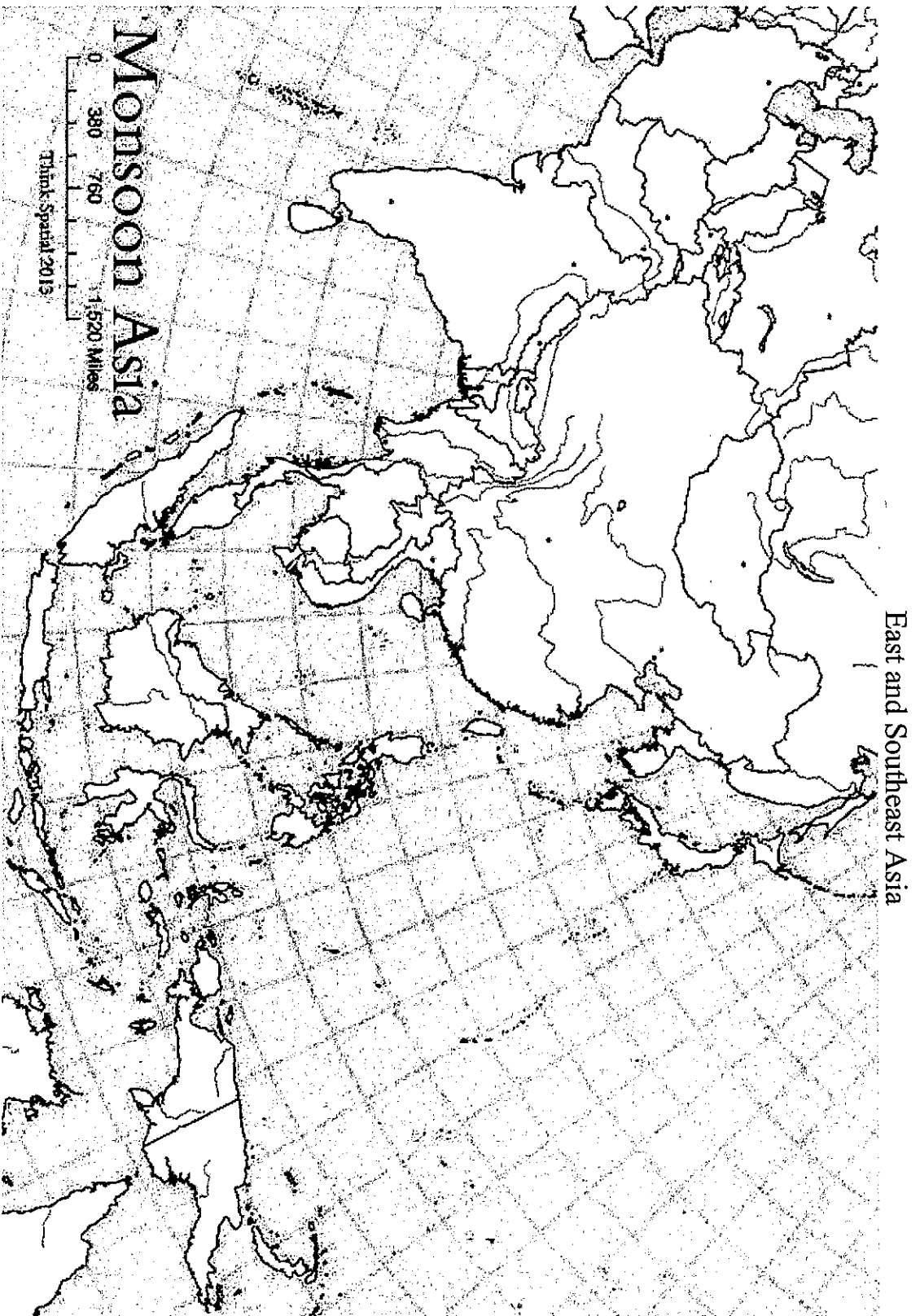


Central and South Asia



Label the following:

1. Sri Lanka
2. Bhutan
3. Kyrgyzstan
4. Pakistan
5. Bangladesh
6. Tajikistan
7. Nepal
8. Kashmir
9. Turkmenistan
10. Maldives
11. Kazakhstan
12. Calcutta
13. India
14. Uzbekistan
15. New Delhi

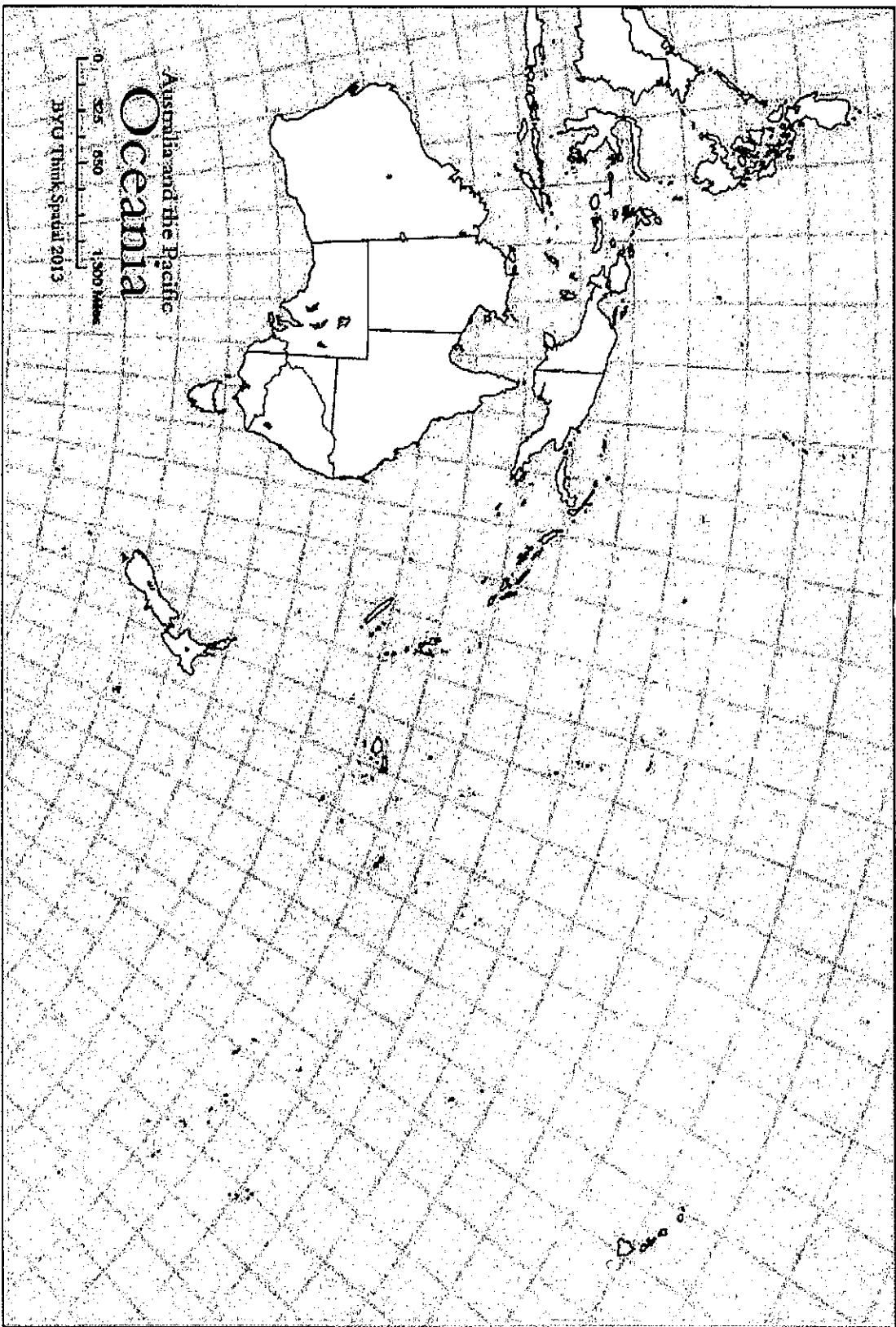


East and Southeast Asia

Label the following:

1.  *Tokyo*
2.  *Shanghai*
3.  *Seoul*
4.  *Pyongyang*
5.  *Taiwan*
6.  *Jakarta*
7.  *Japan*
8.  *Beijing*
9.  *Bangkok*
10.  *Timor-Leste*
11.  *Vietnam*
12.  *Hong Kong*
13.  *Thailand*
14.  *Singapore*
15.  *Malaysia*
16.  *Philippines*
17.  *Myanmar (Burma)*
18.  *China*
19.  *Laos*
20.  *South Korea*
21.  *North Korea*
22.  *Cambodia*
23.  *Brunei*
24.  *Mongolia*
25.  *Indonesia*

Oceania



Label the following and draw a circle around Micronesia, Melanesia, and Polynesia.

- 1. Sydney
- 2. Melbourne
- 3. Auckland
- 4. Australia
- 5. New Zealand
- 6. Micronesia
- 7. Polynesia
- 8. Melanesia
- 9. Papua New Guinea